

Centre Number						Candidate Number				
Surname										
Other Names										
Candidate Signature										

For Examiner's Use	
Examiner's Initials	
Pages	Mark
2–3	
4–5	
6–7	
8–9	
10–11	
12–13	
14–15	
TOTAL	



General Certificate of Secondary Education
Foundation Tier
March 2013

Mathematics

43602F

Unit 2

Monday 4 March 2013 9.00 am to 10.15 am

F

<p>For this paper you must have:</p> <ul style="list-style-type: none"> mathematical instruments. <p>You must not use a calculator.</p>	
--	--

Time allowed

- 1 hour 15 minutes

Instructions

- Use black ink or black ball-point pen. Draw diagrams in pencil.
- Fill in the boxes at the top of this page.
- Answer **all** questions.
- You must answer the questions in the spaces provided. Do not write outside the box around each page or on blank pages.
- Do all rough work in this book.

Information

- The marks for questions are shown in brackets.
- The maximum mark for this paper is 66.
- The quality of your written communication is specifically assessed in Questions 3, 16 and 17. These questions are indicated with an asterisk (*).
- You may ask for more answer paper and graph paper. These must be tagged securely to this answer book.

Advice

- In all calculations, show clearly how you work out your answer.



Answer **all** questions in the spaces provided.

1 These cards show the number 4763.



1 (a) Write the number 4763 in words.

.....
.....

(1 mark)

1 (b) What is the smallest number you can make using **all** four cards?

Four empty rounded rectangular boxes are arranged horizontally, intended for the student to write the digits of the smallest number possible using the cards.

(1 mark)

1 (c) What is the largest **even** number you can make using **all** four cards?

Four empty rounded rectangular boxes are arranged horizontally, intended for the student to write the digits of the largest even number possible using the cards.

(2 marks)

1 (d) Write the number 4763 to the nearest 1000.

Answer

(1 mark)



2 A number is between 20 and 40.
 It is an even number.
 It is a multiple of 7.

What is the number?

.....

Answer (2 marks)

***3** Megan buys
 3 kg of potatoes at £1.50 per kilogram
 and
 2 kg of onions at £1.40 per kilogram.
 She pays with a £10 note.

How much change should she receive?

.....

Answer £ (4 marks)



4 Estimate the value of $98.7 \div 5$

.....
.....

Answer (2 marks)

5 (a) Three of these fractions are equivalent.

Circle the odd one out.

$$\frac{2}{8}$$

$$\frac{3}{12}$$

$$\frac{4}{10}$$

$$\frac{5}{20}$$

(1 mark)

5 (b) Write $\frac{3}{4}$ as a percentage.

Answer % (1 mark)

5 (c) Write 0.3 as a percentage.

Answer % (1 mark)



6 The temperature was recorded at the same time each day.

Day	Mon	Tue	Wed	Thu	Fri	Sat
Temperature (°C)	2	0	1	-3	-1	-2

6 (a) Which temperature was the coldest?

Answer °C (1 mark)

6 (b) How much colder was it on Thursday than on Wednesday?

.....

Answer °C (1 mark)

6 (c) On Sunday, the temperature was 3°C lower than on Saturday.

What was the temperature on Sunday?

.....

Answer °C (1 mark)

Turn over for the next question



7 A school took £832 selling tickets.

Each ticket was sold for £4.

How many tickets were sold?

.....

.....

.....

.....

Answer (2 marks)

8 Work out the value of $5x - 2y$ when $x = 3$ and $y = 4$

.....

.....

Answer (2 marks)



9 Circle the **three** values that are greater than $\frac{1}{2}$

0.32 65% $\frac{1}{4}$ 0.76 $\frac{2}{3}$ 40%

(3 marks)

10 Tick the correct box in each row.

	Always odd	Always even	Can be odd or even
Square numbers	<input type="checkbox"/>	<input type="checkbox"/>	<input type="checkbox"/>
Multiples of 12	<input type="checkbox"/>	<input type="checkbox"/>	<input type="checkbox"/>
Prime numbers greater than 10	<input type="checkbox"/>	<input type="checkbox"/>	<input type="checkbox"/>

(3 marks)

Turn over for the next question



- 11** The shaded L-shape is called L_2 because the top number is 2.

1	2	3	4	5
6	7	8	9	10
11	12	13	14	15
16	17	18	19	20
21	22	23	24	25

The sum of the numbers in L_2 is 34.

- 11 (a)** Work out the sum of the numbers in L_9

.....

.....

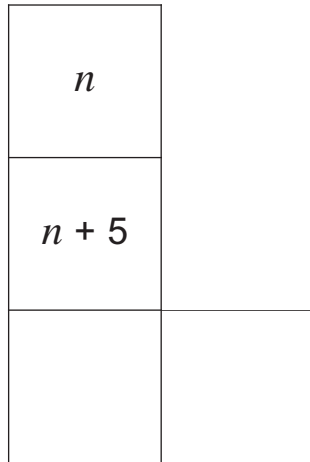
.....

.....

Answer (2 marks)



11 (b) Complete the boxes for L_n



(2 marks)

11 (c) Work out, in terms of n , the sum of L_n
Give your answer in its simplest form.

.....

.....

.....

Answer (2 marks)

Turn over for the next question

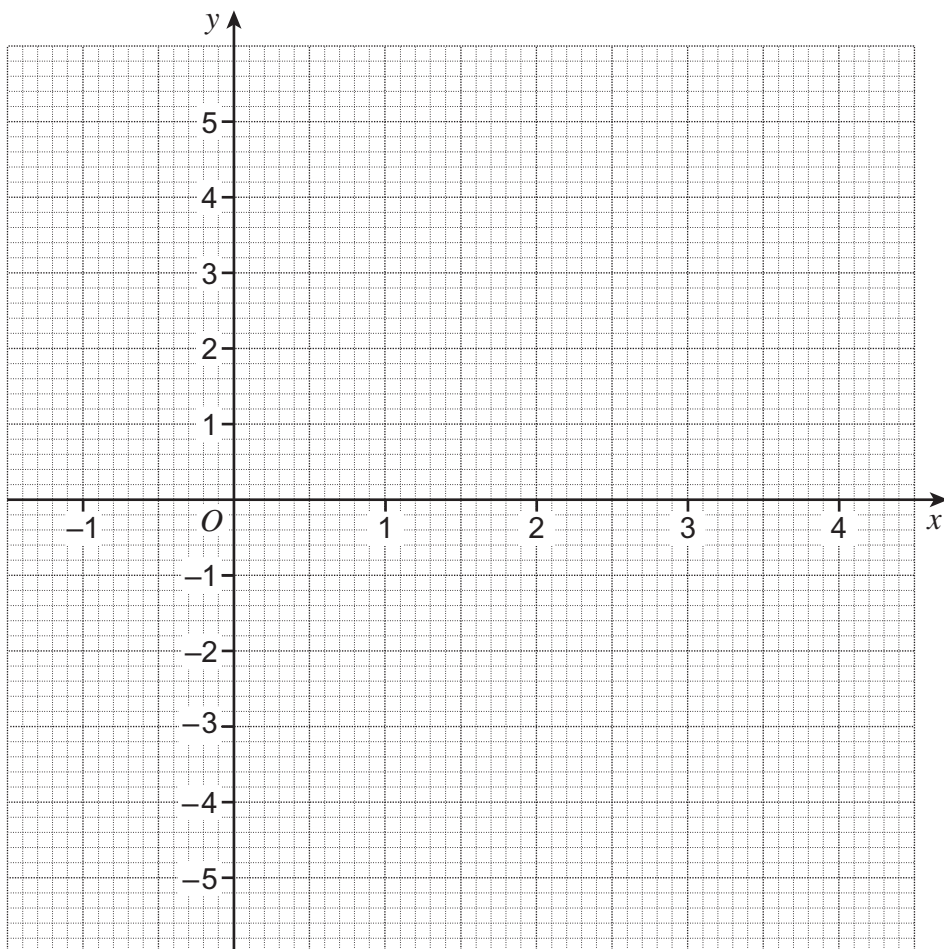


12 (a) Complete the table of values for $y = 2x - 3$

x	-1	0	1	2	3	4
y		-3		1		5

(2 marks)

12 (b) On the grid draw the graph of $y = 2x - 3$ for values of x from -1 to 4.



(2 marks)



13 (a) Write down the value of 5^3

Answer (1 mark)

13 (b) Write down the value of $\sqrt{121}$

Answer (1 mark)

13 (c) Between which **two** consecutive whole numbers does $\sqrt{40}$ lie?

.....
.....

Answer and (2 marks)

14 The terms in this sequence increase by the same amount each time.

..... 12 27

Work out the first term.

.....
.....
.....
.....

Answer (3 marks)



15 The table shows the charge for taking a suitcase on a plane.

Weight of suitcase	Charge
Under 15 kg	Free
15 kg – 22 kg	£20
Over 22 kg	£20 plus £5 for each extra kilogram or part of a kilogram over 22 kg

15 (a) Work out the charge for a suitcase that weighs 24 kg.

.....

Answer £ (2 marks)

15 (b) Work out the charge for a suitcase that weighs 24.3 kg.

Answer £ (1 mark)

15 (c) Jack has two suitcases.
He pays a total charge of £70.
One suitcase weighs 21 kg.

What is the **most** the other suitcase could weigh?

.....
.....
.....

Answer kg (3 marks)



***16**

Here are two adverts for biscuits.

<p>Super Snacks</p> <p>£3.40 per box</p> <p>OFFER 40% off</p>
--

<p>Cookie Club</p> <p>£3.09 per box</p> <p>OFFER $\frac{1}{3}$ off</p>
--

Which is cheaper, Super Snacks or Cookie Club?
You **must** show your working.

.....

.....

.....

.....

.....

.....

.....

.....

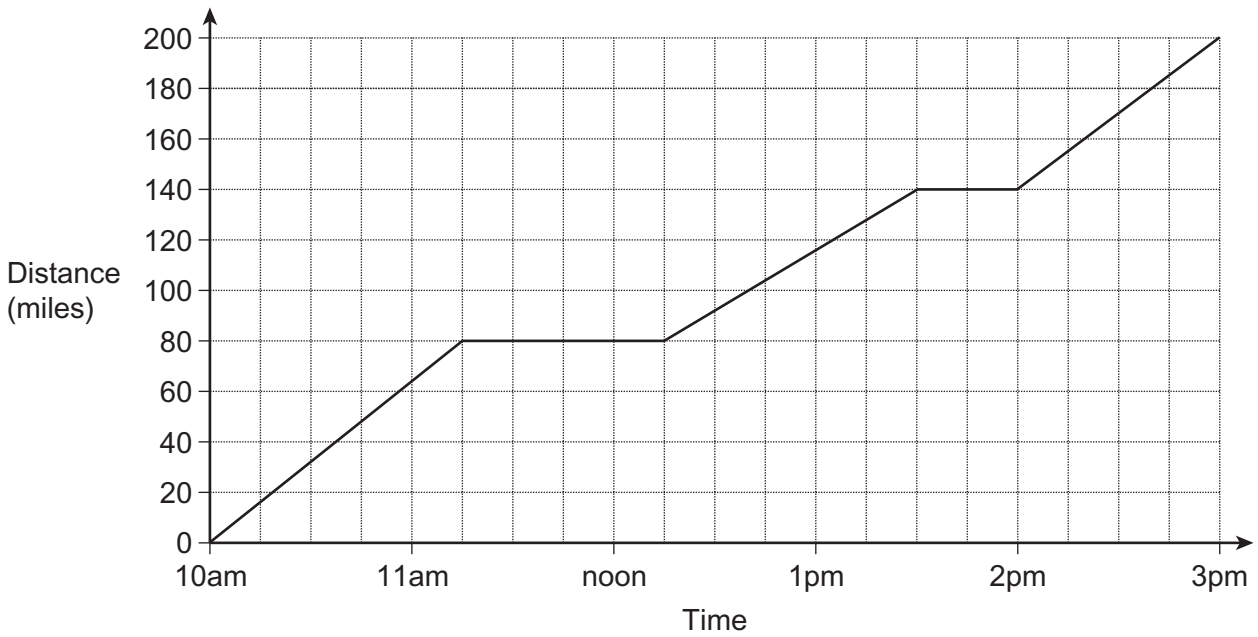
.....

Answer (5 marks)

Turn over for the next question



*17 The distance-time graph represents a journey Alf makes.



Alf claims that he stopped for less than one-quarter of his total journey time.

Is he correct?

You **must** show your working.

.....

.....

.....

.....

.....

.....

.....

.....

.....

(3 marks)



18 (a) Simplify $a^{20} \times a^5$

Answer (1 mark)

18 (b) Simplify $\frac{a^{20}}{a^5}$

Answer (1 mark)

19 (a) Rearrange $f = 3g + 2$ to make g the subject.

.....
.....

Answer (2 marks)

19 (b) Multiply out $x^2(4 - x)$

.....
.....

Answer (2 marks)

END OF QUESTIONS



There are no questions printed on this page

**DO NOT WRITE ON THIS PAGE
ANSWER IN THE SPACES PROVIDED**

