

Centre No.						Paper Reference						Surname	Initial(s)	
Candidate No.						1	3	8	0	/	2	F	Signature	

Paper Reference(s)

**1380/2F**

# Edexcel GCSE

## Mathematics (Linear) – 1380

### Paper 2 (Calculator)

# Foundation Tier

Friday 12 November 2010 – Morning

Time: 1 hour 30 minutes



Examiner's use only

--	--	--

Team Leader's use only

--	--	--

#### Materials required for examination

Ruler graduated in centimetres and millimetres, protractor, compasses, pen, HB pencil, eraser, calculator. Tracing paper may be used.

#### Items included with question papers

Nil

### Instructions to Candidates

In the boxes above, write your centre number, candidate number, your surname, initials and signature.

Check that you have the correct question paper.

Answer ALL the questions. Write your answers in the spaces provided in this question paper.

**You must NOT write on the formulae page.**

**Anything you write on the formulae page will gain NO credit.**

If you need more space to complete your answer to any question, use additional answer sheets.

### Information for Candidates

The marks for individual questions and the parts of questions are shown in round brackets: e.g. (2).

There are 27 questions in this question paper. The total mark for this paper is 100.

There are 24 pages in this question paper. Any blank pages are indicated.

**Calculators may be used.**

If your calculator does not have a  $\pi$  button, take the value of  $\pi$  to be 3.142 unless the question instructs otherwise.

### Advice to Candidates

Show all stages in any calculations.

Work steadily through the paper. Do not spend too long on one question.

If you cannot answer a question, leave it and attempt the next one.

Return at the end to those you have left out.

This publication may be reproduced only in accordance with Edexcel Limited copyright policy. ©2010 Edexcel Limited.

Lots more free papers at  
<http://bland.in>

W850/R1380F/57570 6/6/6/



*Turn over*

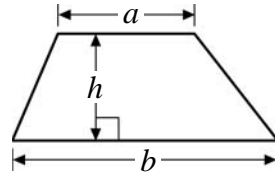
**edexcel**   
advancing learning, changing lives

GCSE Mathematics (Linear) 1380

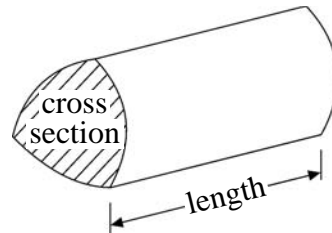
Formulae: Foundation Tier

**You must not write on this formulae page.  
Anything you write on this formulae page will gain NO credit.**

**Area of trapezium** =  $\frac{1}{2}(a + b)h$



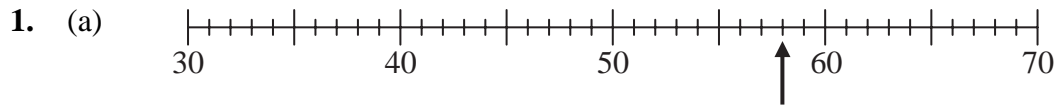
**Volume of prism** = area of cross section  $\times$  length



**Answer ALL TWENTY SEVEN questions.**

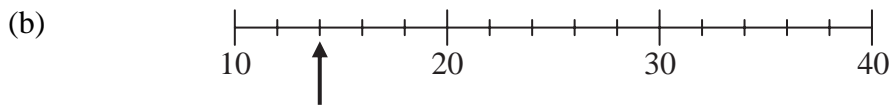
**Write your answers in the spaces provided.**

**You must write down all stages in your working.**



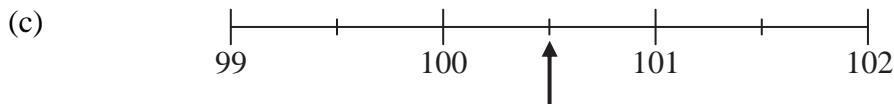
Write down the number marked by the arrow.

..... (1)



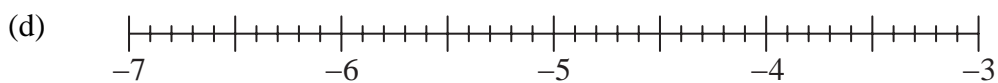
Write down the number marked by the arrow.

..... (1)



Write down the number marked by the arrow.

..... (1)



Find the number  $-5.2$  on the number line.  
Mark it with an arrow (↑).

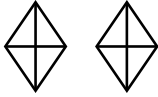

(1)

Q1

(Total 4 marks)



2. Jason asked some students what their favourite colour was.  
The pictogram shows information about the number of students whose favourite colour was red or blue.

Red	
Blue	
Purple	
Yellow	

Key:  represents 4 students

- (a) Write down the number of students who said red.

.....  
**(1)**

- (b) Write down the number of students who said blue.

.....  
**(1)**

12 students said their favourite colour was purple.  
5 students said their favourite colour was yellow.

- (c) Use this information to complete the pictogram.

**(2)** **Q2**

**(Total 4 marks)**



3. Melissa buys

- 1 calculator at £4.38
- 1 ruler at 45p
- 2 pencils at 29p each



She pays with a £10 note.

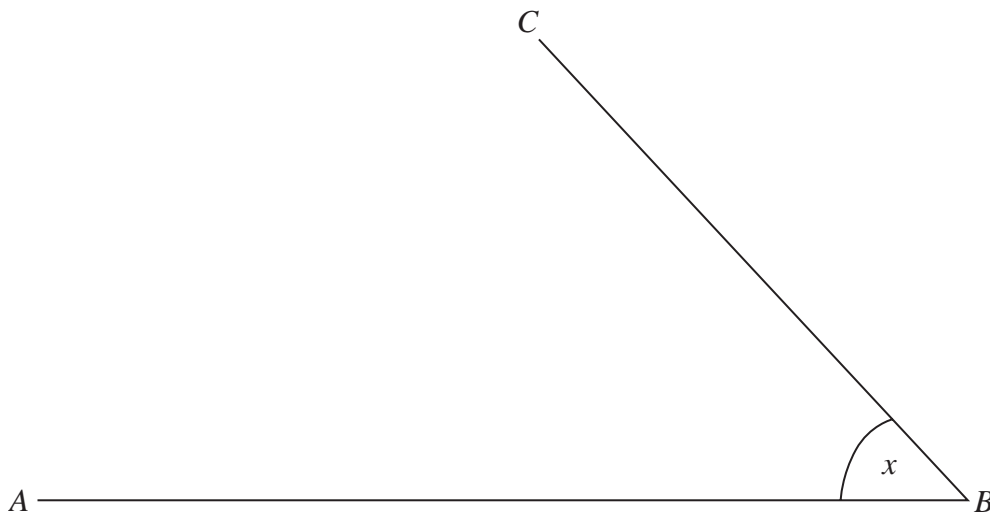
Work out how much change Melissa should get.

£.....

(Total 3 marks)

Q3

4.



- (a) Measure the length of the line  $AB$ .  
Give the units with your answer.

.....

(2)

- (b) Measure the size of the angle marked  $x$ .

..... °

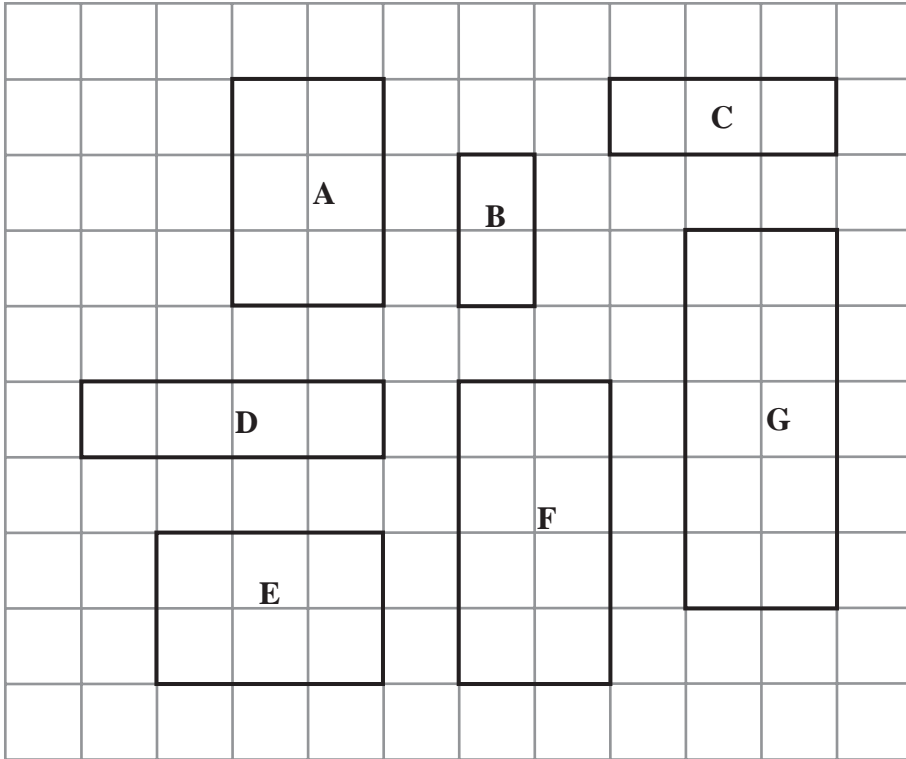
(1)

(Total 3 marks)

Q4



5. Here are some rectangles on a grid of centimetre squares.



(a) Find the area of rectangle **G**.

.....cm<sup>2</sup>  
(1)

(b) Find the perimeter of rectangle **B**.

.....cm  
(1)

**Two** of the rectangles are congruent.

(c) Write down the letters of these two rectangles.

..... and .....  
(1)

Rectangle **F** is an enlargement of rectangle **B**.

(d) Write down the scale factor of the enlargement.

.....  
(1)

(Total 4 marks)

Q5



6. There are 11 children in a room.

6 of the children are girls.

(a) What fraction of the children are girls?

.....  
(1)

2 of the boys are sitting down.

(b) What fraction of the boys are sitting down?

.....  
(1)

**(Total 2 marks)**

**Q6**

7. (a) Simplify  $k + k + k + k + k$

.....  
(1)

(b) Simplify  $2m + 3m - m$

.....  
(1)

(c) Solve  $6x = 30$

$x =$  .....  
(1)

(d) Solve  $17 - y = 14$

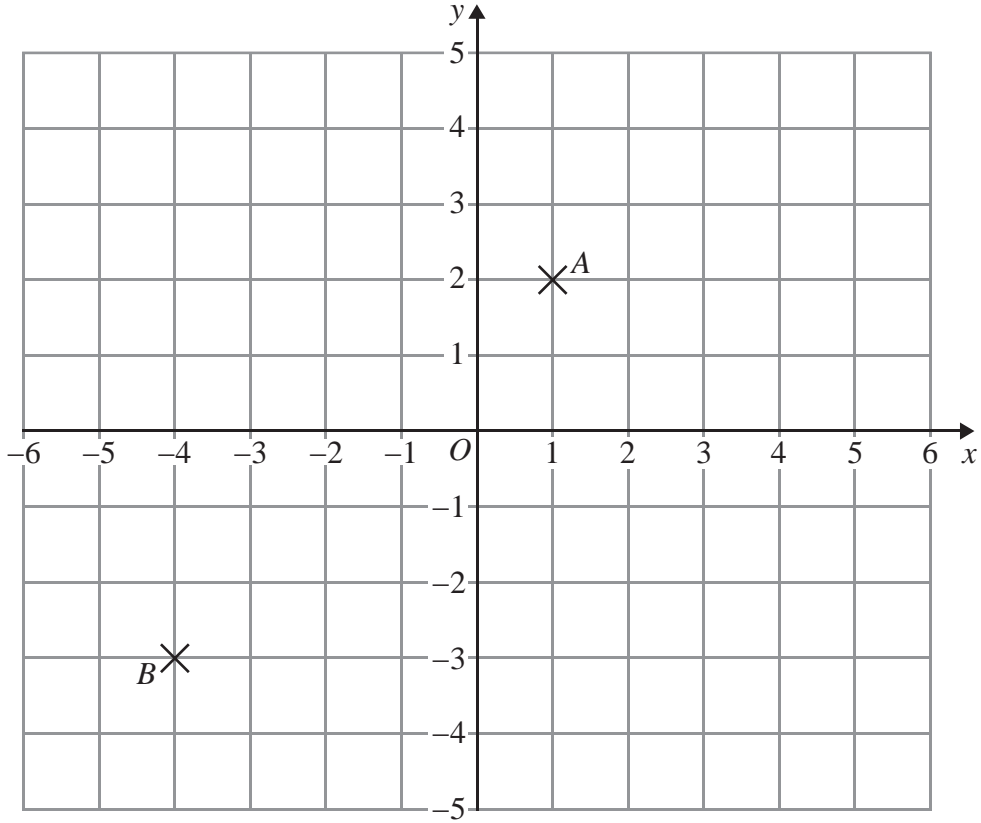
$y =$  .....  
(1)

**(Total 4 marks)**

**Q7**



8.



(a) (i) Write down the coordinates of the point A.

( ..... , ..... )

(ii) Write down the coordinates of the point B.

( ..... , ..... )

(2)

(b) On the grid, plot the point (5, -1).  
Label this point C.

(1)

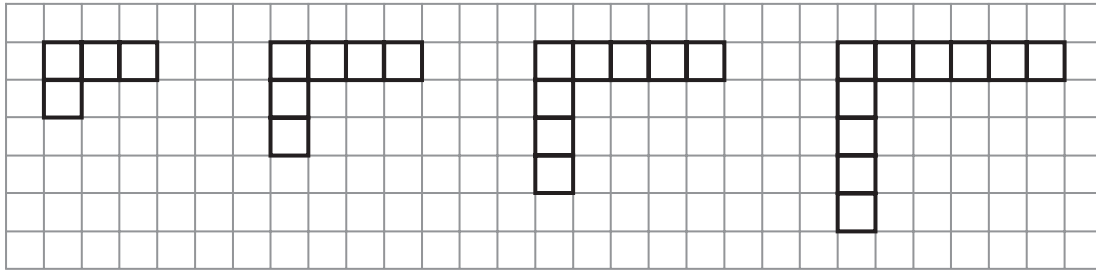
(Total 3 marks)

Q8





9. Here are some patterns made from squares.



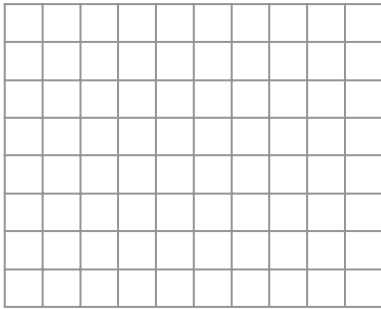
Pattern 1

Pattern 2

Pattern 3

Pattern 4

(a) On the grid below, draw Pattern 5



(1)

(b) Complete the table for Pattern 5 and Pattern 6

<b>Pattern</b>	1	2	3	4	5	6
<b>Number of squares</b>	4	6	8	10		

(2)

Amit says

‘625 is a number in the sequence 4, 6, 8, 10, ....’

(c) Amit is **wrong**.  
Explain why.

.....  
.....

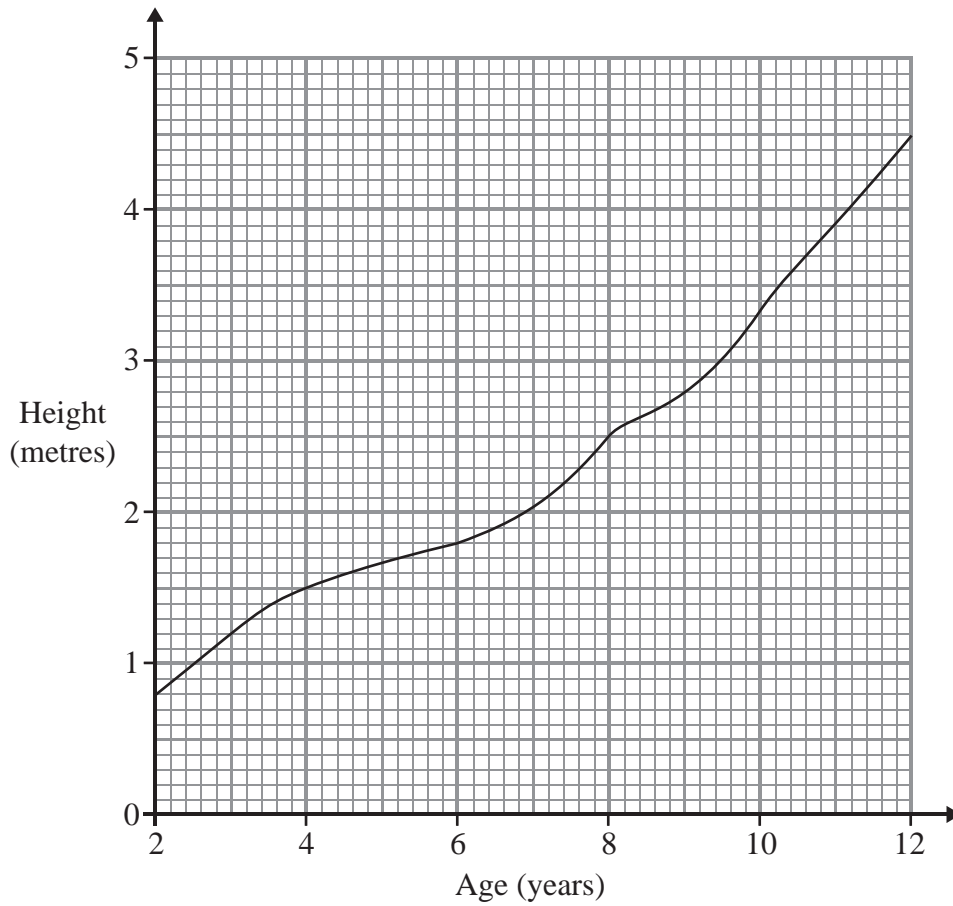
(1)

Q9

(Total 4 marks)



10. The graph shows information about the age and height of a tree.



(a) Use the graph to find the height of the tree when it was exactly 4 years old.

..... m  
(1)

(b) Use the graph to find the age of the tree when it had a height of 3.6 m.

..... years  
(1)

(Total 2 marks)

Q10



11. Here are the weights, in kg, of 7 people.

57      87      49      49      72      45      75

(a) Work out the range of these weights.

..... kg  
(2)

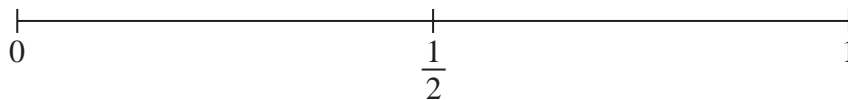
(b) Work out the mean weight.

..... kg  
(2)

(Total 4 marks)

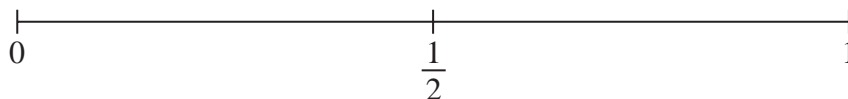
Q11

12. (a) On the probability scale below, mark with a cross (×) the probability that in an all girls school the youngest student will be a girl.



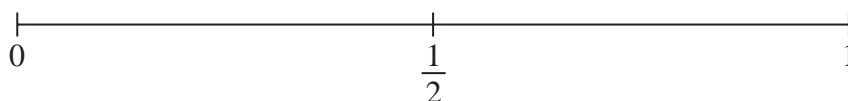
(1)

(b) On the probability scale below, mark with a cross (×) the probability that the next baby born in London will be a boy.



(1)

(c) On the probability scale below, mark with a cross (×) the probability that when a fair dice is rolled it will land on a number less than 3.



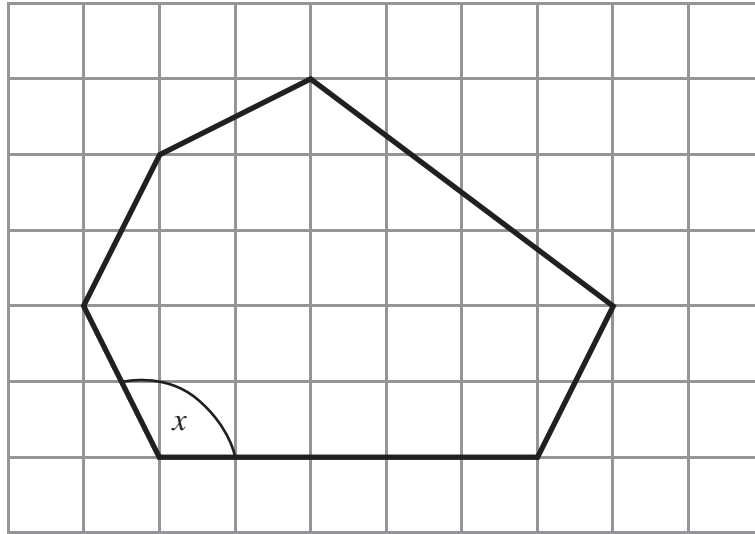
(1)

(Total 3 marks)

Q12



13. Here is a six-sided polygon drawn on a grid.



(a) Write down the mathematical name of a six-sided polygon.

.....  
(1)

(b) On the polygon, mark with arrows (>>) a pair of parallel lines.

(1)

(c) What type of angle is the angle marked  $x$ ?

.....  
(1)


(Total 3 marks)

Q13




14. Two shops, Food Mart and Jim's Store, both sell Kreemy Yoghurts.

**Food Mart**  
Kreemy Yoghurts



5 for £1.80

**Jim's Store**  
Kreemy Yoghurts



3 for £1.05

At which shop are Kreemy Yoghurts the better value for money?  
You must show all your working.

.....

(Total 3 marks)

Q14



15. Here are all the factors of 16

1      2      4      8      16

(a) Write down the factor of 16 that is a prime number.

.....  
(1)

(b) Write down all the factors of 14

.....  
(2)

(Total 3 marks)

Q15

16. (a) Write these numbers in order of size.  
Start with the smallest number.

0.306      0.63      0.3      0.068

.....  
(1)

(b) Write these fractions in order of size.  
Start with the smallest fraction.

$\frac{3}{4}$        $\frac{7}{12}$        $\frac{5}{6}$        $\frac{3}{8}$

.....  
(2)

(Total 3 marks)

Q16



17. A family of 2 adults and 3 children went on holiday to Miami.  
They travelled from London by plane.

Adult plane tickets cost £459 each.  
Child plane tickets cost £289 each.

(a) Work out the **total** cost of the plane tickets for the 2 adults and 3 children.

£ .....  
(2)

The family visited a theme park.  
They paid a total of 322 dollars to go in.

The exchange rate was £1 = 1.84 dollars.

(b) Change 322 dollars to pounds (£).

£ .....  
(2)

The distance from London to Miami is 7120 km.  
The plane journey took 8 hours.

(c) Calculate the average speed of the plane.

.....km/h  
(2)

(Total 6 marks)

Q17



18. This rule is used to work out the number of points a team gets.

$$\boxed{\begin{array}{c} \text{Number of} \\ \text{points} \end{array}} = \boxed{\begin{array}{c} \text{Number of} \\ \text{games won} \times 3 \end{array}} + \boxed{\begin{array}{c} \text{Number of} \\ \text{games drawn} \end{array}}$$

Rovers have won 8 games and drawn 2 games.

(a) How many points have Rovers got?

.....  
(2)

Grangers have got 42 points.  
They have drawn 6 games.

(b) How many games have Grangers won?

.....  
(2)

(Total 4 marks)

Q18





19.

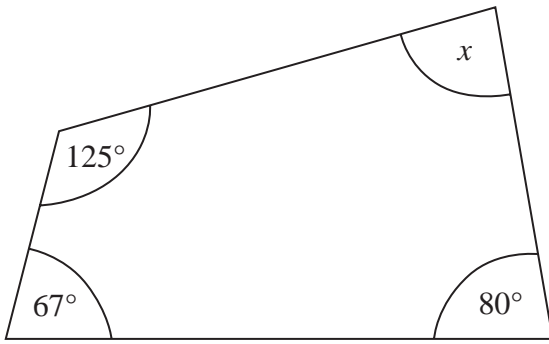


Diagram **NOT** accurately drawn

(a) (i) Work out the size of the angle marked  $x$ .

$x = \dots\dots\dots^\circ$

(ii) Give a reason for your answer.

.....  
.....

(3)

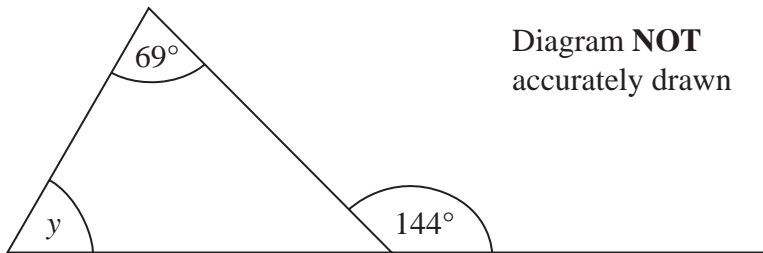


Diagram **NOT** accurately drawn

(b) (i) Work out the size of the angle marked  $y$ .

$y = \dots\dots\dots^\circ$

(ii) Give a reason for your answer.

.....  
.....

(3)

(Total 6 marks)

Q19



20. 100 people played sport on Sunday.  
Each person played only one sport.

The two-way table shows some information about which sport they played.

	Football	Tennis	Rugby	Netball	Total
Men			10	8	54
Women	20	9			
Total	44		16		100

(a) Complete the two-way table.

(3)

(b) How many women played football?

.....

(1)

(c) How many people did **not** play rugby?

.....

(1)

Q20

(Total 5 marks)

21. Use your calculator to work out

$$\frac{13.7 + 5.86}{2.54 \times 3.17}$$

Write down all the figures on your calculator display.  
You must give your answer as a decimal.

.....

Q21

(Total 2 marks)



22.

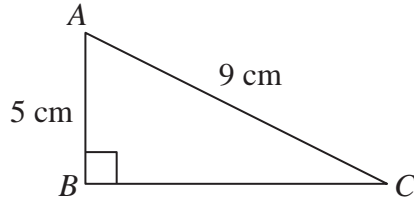


Diagram **NOT** accurately drawn

$ABC$  is a right-angled triangle.

$AB = 5$  cm,

$AC = 9$  cm.

Work out the length of  $BC$ .

Give your answer to 2 decimal places.

..... cm

**Q22**

**(Total 3 marks)**

23. Noah got 8 out of 20 in a test.

Write 8 out of 20 as a percentage.

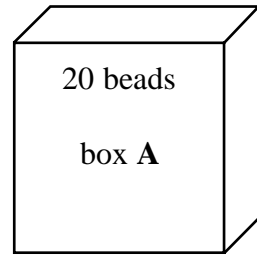
..... %

**Q23**

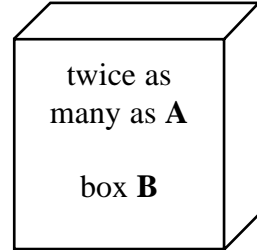
**(Total 2 marks)**



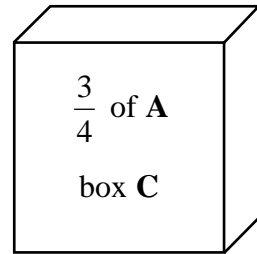
24. There are 20 beads in box A.



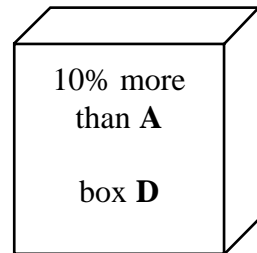
In box B there are twice as many beads as in box A.



In box C there are  $\frac{3}{4}$  of the number of beads as in box A.



In box D there are 10% more beads than in box A.



Work out the **total** number of beads in the four boxes.

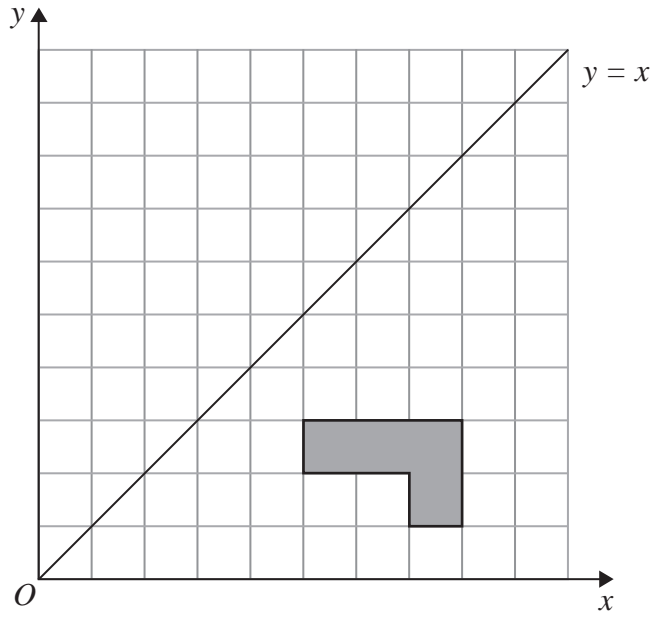
..... beads

**(Total 4 marks)**

**Q24**

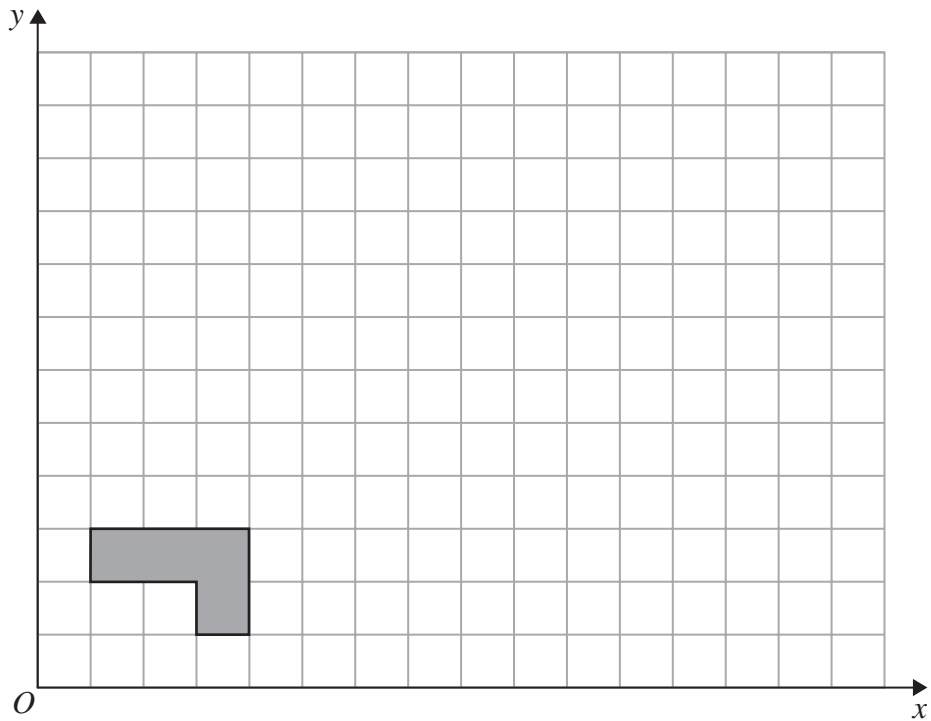


25.



(a) Reflect the shaded shape in the line  $y = x$ .

(2)



(b) On the grid, enlarge the shaded shape by a scale factor of 3, centre  $O$ .

(3)

Q25

(Total 5 marks)



26. 200 students in Year 11 took a mathematics test.  
Kamini wants to find out whether students in Year 11 like mathematics.

For her sample she asks the 20 students who got the highest marks in the test.

This is **not** a good sample to use.

(a) Write down **one** reason why.

.....  
.....

(1)

She uses this question on her questionnaire.

What do you think of mathematics?		
<input type="checkbox"/>	<input type="checkbox"/>	<input type="checkbox"/>
Excellent	Very good	Good

(b) Write down **one** thing that is wrong with this question.

.....  
.....

(1)

Kamini also wants to find out how many hours students spend on their mathematics homework.

(c) Design a suitable question that Kamini could use on her questionnaire.  
You must include some response boxes.

(2)

Q26

(Total 4 marks)



27. (a) Solve  $2x + 3 = 10$

$x = \dots\dots\dots$   
(2)

(b) Simplify

(i)  $c^5 \times c^6$

$\dots\dots\dots$

(ii)  $e^{12} \div e^4$

$\dots\dots\dots$

(2)

(c) Simplify fully  $7x - 2(x - 3y) - 4y$

$\dots\dots\dots$

(3)

(Total 7 marks)

Q27

**TOTAL FOR PAPER: 100 MARKS**

**END**



**BLANK PAGE**

